


Year 1 Fractions

How can we progress with fractions?

Recognise, find and name a half as one of two equal parts of an object, shape or quantity.

Concrete



Recognise, find and name a quarter as four equal parts of an object, shape or quantity.

Pictorial

A whole apple



1

Half an apple



$\frac{1}{2}$

Recognise, find and name one

Abstract

Half of 10 =


Half of 8 =

Half of 14 =

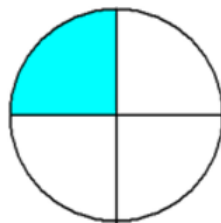
$\frac{1}{2}$ of

of

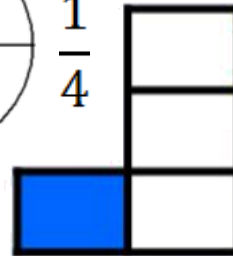
Concrete



Pictorial



$\frac{1}{4}$



Abstract

A quarter of 20 =

A quarter of 12 =

A quarter of 8 =

$\frac{1}{4}$ of